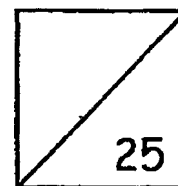




HENRY PARK PRIMARY SCHOOL
MATHEMATICS
PRIMARY 1
TOPICAL QUIZ 2
NUMBERS TO 20 &
ADDITION AND SUBTRACTION WITHIN 20



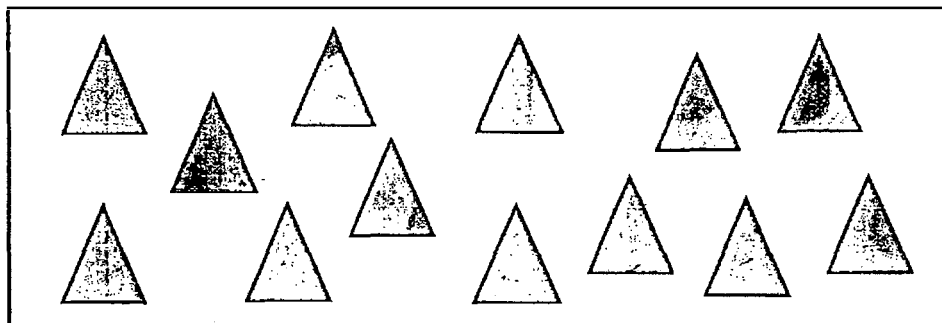
Name: _____ () Date: _____

Class: Primary 1 _____ Parent's Signature: _ _

Section A: MCQ (4 x 1 mark = 4 marks)

Read the questions carefully. Choose the correct answer and write its number in the brackets provided.

1. Look at the picture shown below.

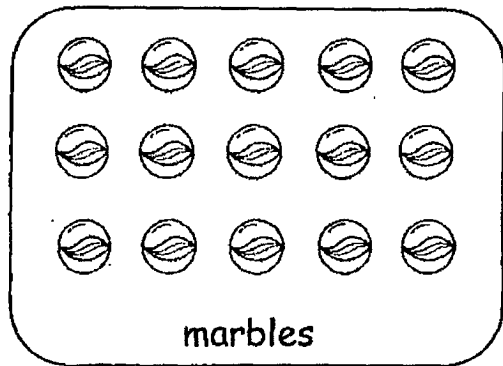
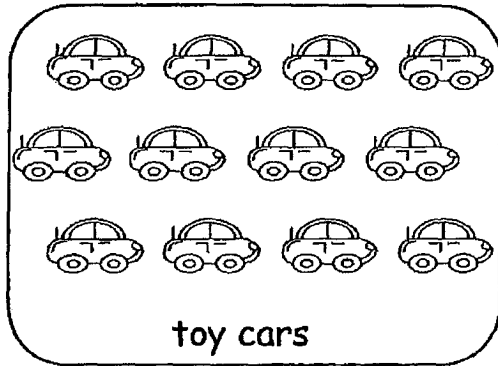


What is the total number of triangles shown above?

- (1) 12
- (2) 13
- (3) 14
- (4) 15

()

2. Count and compare.




How many **fewer** toy cars than marbles are there?

- (1) 15
- (2) 12
- (3) 3
- (4) 4

()

3.



+



=



How many cookies are there **altogether**?

- (1) 5
- (2) 14
- (3) 15
- (4) 19

()

4. $13 - 7 = \underline{\hspace{2cm}}$

(1) 5

(2) 6

(3) 10

(4) 20

()

Section B: Open-ended Questions (13 marks)

Fill in the correct answers in the spaces provided.

Questions 5 to 11 carry 1 mark each.

5. Write the number in words.

18	
----	--

6. Arrange the numbers in order.
Begin with the greatest.

12

7

17

11

_____ , _____ , _____ , _____
greatest

For Questions 7, 8 and 9, fill in the missing numbers in the boxes.

7.

--

 - 5 = 7

8. 8 and

--

 make 17.

9. $14 + 5 =$

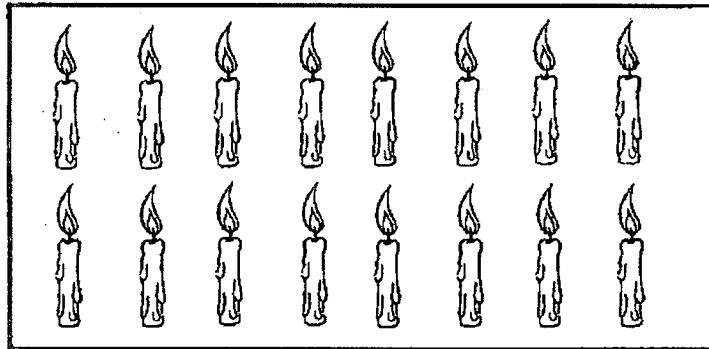
--

10. Use the numbers below to form an addition equation.



$$\square + \square = \square$$

11. Ahmad has some candles as shown in the picture below.



3 of the candles are green.
8 of the candles are blue.
The rest of the candles are red.
How many red candles does Ahmad have?

Ahmad has red candles.

Questions 12 to 14 carry 2 marks each.

12. Complete the number pattern below.

5, 7, 9, _____, 13, _____, 17, 19

13. Circle three numbers that add up to 13.

2

6

3

5

14. Look at the numbers below.

15

19

10

Subtract the **smallest number** from the **greatest number**.

□

-

□

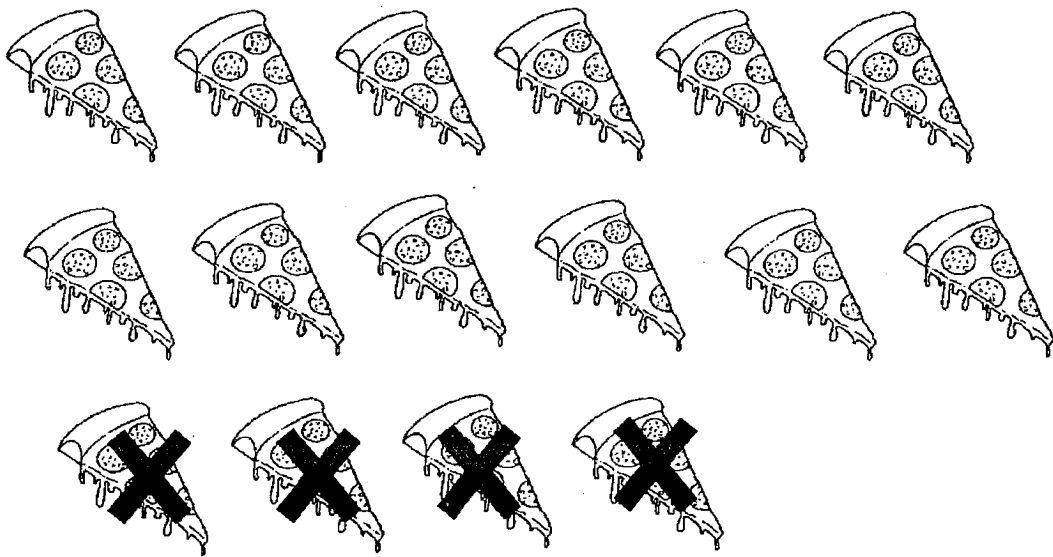
=

□

Section C: Problem Sums (4 x 2 marks = 8 marks)

Do these sums carefully. Show all your equations and workings clearly in the spaces.

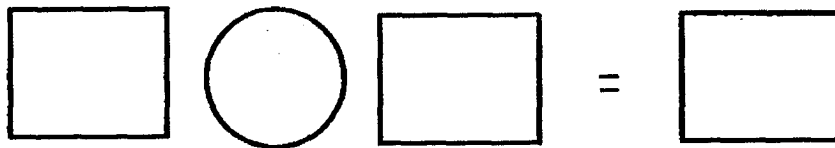
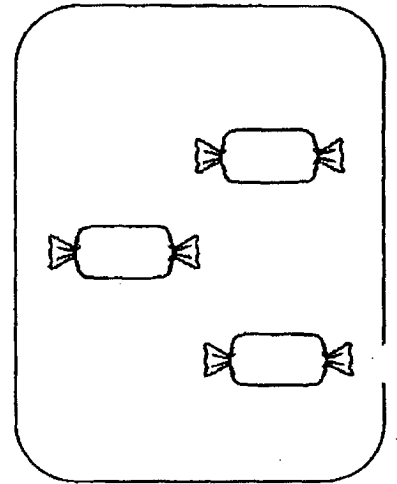
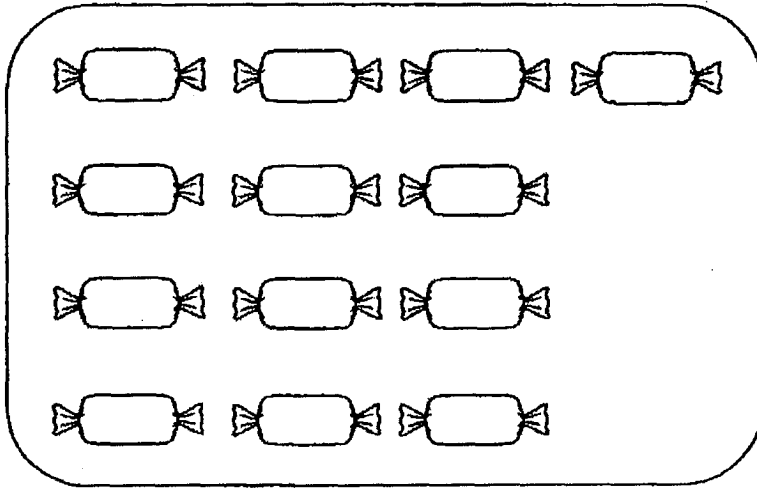
15. Ellie has 16 slices of pizza.
She ate 4 of them.
How many slices of pizza is left?



$$\square \bigcirc \square = \square$$



There are slices of pizza left.

16. Sarah has 13 sweets.
Her mother gave her 3 more sweets.
How many sweets does she have altogether?



She has sweets altogether.

17. Jake has 10 cupcakes in a bag and 5 cupcakes on a plate.
How many cupcakes does he have altogether?



$$\square \bigcirc \square = \square$$

He has cupcakes altogether.


18. Kate had 15 roses.
Fiona had 9 roses.
Fiona wants to have the same number of roses as Kate.
How many more roses will Fiona buy?



Kate



Fiona



Fiona will buy more roses.

- End of paper -

Setter: Ms Shikin Yahya

SCHOOL : HENRY PARK PRIMARY SCHOOL

LEVEL : PRIMARY 1

SUBJECT : MATH

TERM : QUIZ 2 (2023)

1)	2
2)	3
3)	4
4)	2
5)	eighteen
6)	17, 12, 11, 7
7)	12
8)	9
9)	19
10)	$7 + 8 = 15$
11)	5
12)	11, 15
13)	2, 6, 5
14)	$19 - 10 = 9$
15)	$16 - 4 = 12$ There are 12 slices of pizza left.
16)	$13 + 3 = 16$ She has 16 sweets altogether.
17)	$10 + 5 = 15$ He has 15 cupcakes altogether.

18)

$$15 - 9 = 6$$

Fiona will buy 6 more roses.