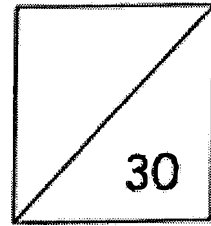




HENRY PARK PRIMARY SCHOOL  
2023 PRIMARY 2  
MATHEMATICS QUIZ 1



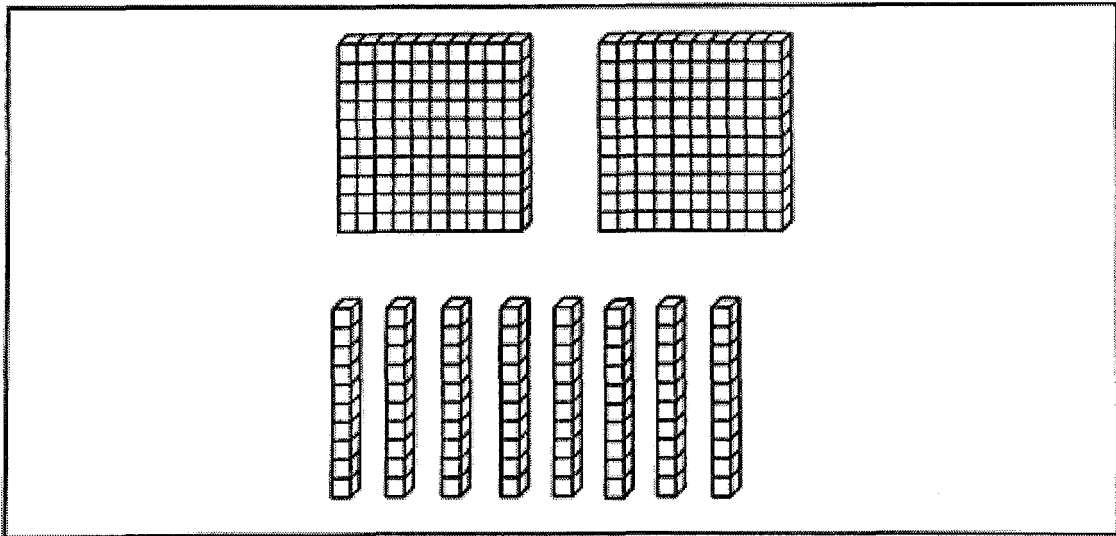
Name: \_\_\_\_\_ ( ) Date: \_\_\_\_\_

Class: Primary 2 \_\_\_\_\_ Parent's Signature: \_\_\_\_\_

**Section A: Multiple-choice Questions (4 x 1 mark)**

Choose the correct answer and write its number (1, 2, 3 or 4) in the brackets provided.

1. How many cubes are there altogether?



- 1) 208
- 2) 218
- 3) 280
- 4) 288

( )

2.  $7 + 50 + 600 = \boxed{?}$   
What is the answer?

- 1) 567
- 2) 657
- 3) 756
- 4) 810

( )

3. Add 80 to 111.  
What is the answer?

- 1) 31
- 2) 181
- 3) 191
- 4) 911

( )

4. Subtract 12 from 981.  
What is the answer?

- 1) 861
- 2) 969
- 3) 979
- 4) 993

( )

**Section B: Open-ended Questions (18 marks)**

Fill in the correct answers in the spaces provided.

Questions 5 to 8 carry 1 mark each.

5. In 580, which digit is in the ones place?

The digit is .


- 6.

$$\begin{array}{r} 813 \\ + 126 \\ \hline \square \square \square \\ \hline \end{array}$$

- 7.

$$\begin{array}{r} 456 \\ - 268 \\ \hline \square \square \square \\ \hline \end{array}$$

8. Sam is thinking of a 3-digit number.  
Read the clues given to find what the number is.



**Clues:**

- It is an even number.
- The sum of all the 3 digits is 9.

Sam's number is

Questions 9 to 15 carry 2 marks each.

9a. Circle the smallest number.

682

826

286

628

9b. Arrange these numbers from the greatest to smallest.

99

999

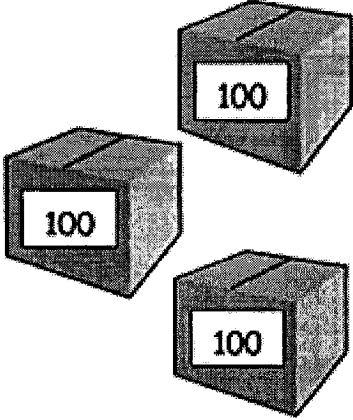


109

190

---

greatest

10. How many marbles are there altogether?

Boxes of marbles	Bags of marbles	Marbles
		

(a) Write your answer in numbers.

There are  marbles altogether.

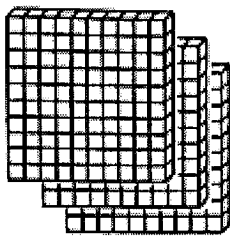
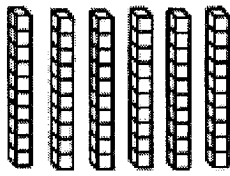

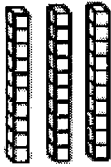

(b) Write your answer in words.

There are   
marbles altogether.

11. Fill in the boxes with the correct numbers.

$$\begin{array}{r}
 2 \quad \square \quad 7 \\
 + \quad 5 \quad \square \\
 \hline
 2 \quad 8 \quad 8 \\
 \hline
 \end{array}$$

12. Study the table shown.  
Complete the equation to find the total number of cubes.

Hundreds	Tens	Ones
		
		

$$\boxed{\phantom{000}} + \boxed{36} = \boxed{\phantom{000}}$$

13. a) Find the sum of 107 and 31.

- b) Subtract 100 from your answer in (a).

14. Study the number pattern carefully.

,  ,  ,  ,  ,  ,  ,  ,

What is the missing number in the box?

The missing number is

15. Tim has 650 stickers in a bag.  
He has 100 fewer stickers than Sarah.  
How many stickers does Sarah have?

stickers

**Section C: Problem Sums (8 marks)**

Do these sums carefully. You may use models to help you. Show all your equations and workings clearly in the spaces provided. Questions 16 to 17 carry 2 marks each.

16. There were 425 students in the hall at first. 317 students came into the hall later. How many students were there in the hall in the end?

Working

There are  
the end.

students in the hall in

17. Mdm Lau had 167 stickers. She gave 79 stickers to her students.  
How many stickers did Mdm Lau have left?

Working

Mdm Lau has  stickers now.

Question 18 carries 4 marks.

18. Mike scored 545 points in a game.  
Sam scored 278 points in the same game.  
Jessica scored 126 more points than Sam.

(a) How many fewer points did Sam score than Mike in the game?

Sam scored  fewer points than Mike in the game.

Working

(b) How many points did Jessica score in the game?

Jessica scored  points in the game.

Working

--- END OF PAPER ---  
Setter: Mr Siew Wai Kong



SCHOOL : HENRY PARK PRIMARY SCHOOL

LEVEL : PRIMARY 2

SUBJECT : MATH

TERM : REVIEW 1 (2023)

Q 1	Q2	Q3	Q4	Q5
2	2	3	2	0

6)	939
7)	188
8)	432
9)	a)286 b)999, 190, 109, 99
10)	a)326 b)three hundred and twenty-six
11)	$237 + 51 = 288$
12)	$365 + 36 = 401$
13)	a)138 b)38
14)	309
15)	750
16)	$425 + 317 = 742$ There are 742 students in the hall in the end.
17)	$167 - 79 = 88$ Mdm Lau has 88 stickers now.

18)

a)  $545 - 278 = 267$

Sam scored 267 fewer points than Mike in the game.

b)  $278 + 126 = 404$

Jessica scored 404 points in the game.