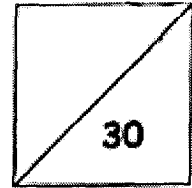




HENRY PARK PRIMARY SCHOOL
2023 PRIMARY 2
MATHEMATICS QUIZ 2




Name: _____ () Date: _____

Class: Primary 2 _____ Parent's Signature: _____

Section A: Multiple-choice Questions (5 x 1 mark)

Choose the correct answer and write its number (1, 2, 3 or 4) in the brackets provided.

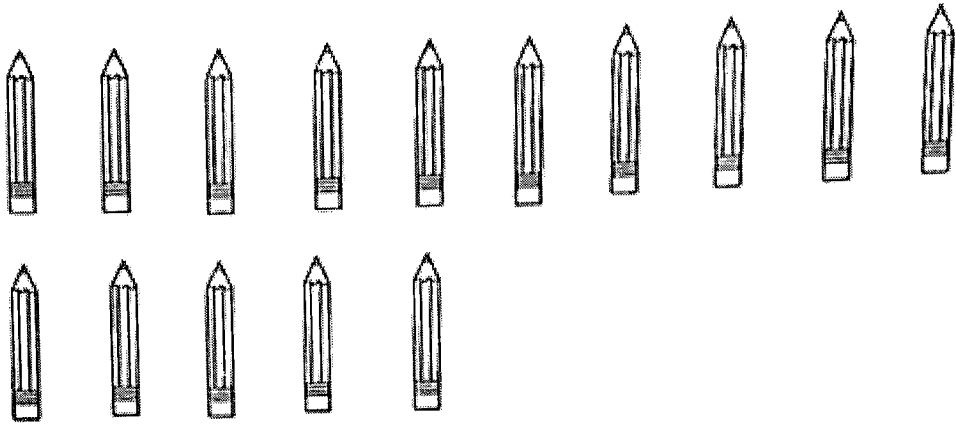
1. 2 groups of 5 is the same as _____ .



- 1) $5 + 5$
- 2) 5×5
- 3) $2 + 2$
- 4) 2×2

()

2. There are _____ fives in 15.



- 1) 1
- 2) 2
- 3) 3
- 4) 4


()

3. $6 \times 2 =$ _____

- 1) 8
- 2) 12
- 3) 3
- 4) 4

()

4. $45 \div 5 =$ _____



- 1) 5
- 2) 9
- 3) 40
- 4) 50

()

5. 10×10 is _____ more than 9×10 .

- 1) 1
- 2) 10
- 3) 100
- 4) 190


()

Section B: Open-ended Questions (17 marks)


Fill in the correct answers in the spaces provided.

Questions 6 to 10 carry 1 mark each.

6. Circle the mangoes to show 2 equal groups of mangoes.



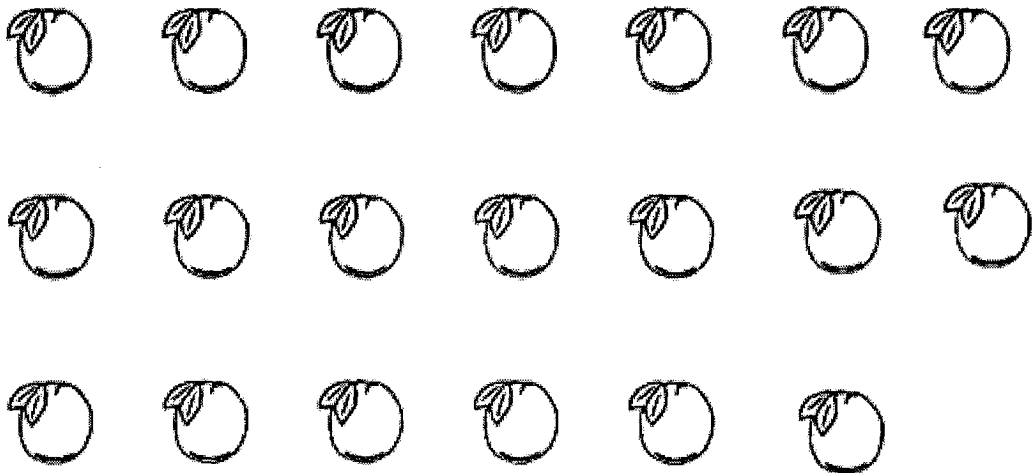
7. Circle the apples to show groups of 6.



8. Multiply 5 by 8. The answer is .

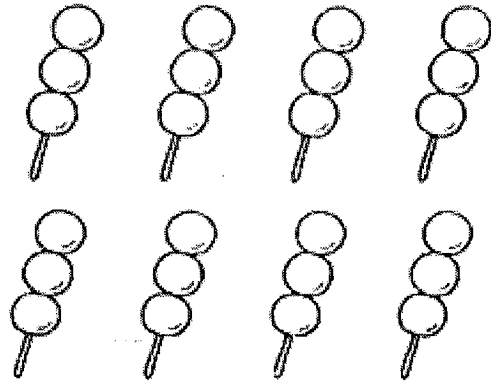
9. $\div 2 = 7$

10. Jane packs 20 oranges equally into 5 bags. Circle to show the number of oranges in one bag.




Questions 11 to 16 carry 2 marks each.

11. There are 3 fishballs on a stick. How many fishballs would there be on 8 such sticks altogether?



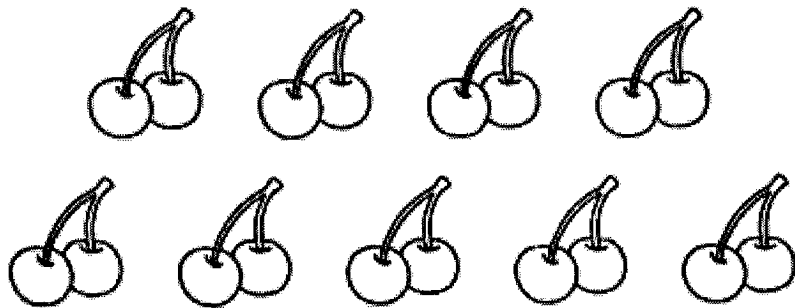
fishballs

12. Fill in the boxes to complete the multiplication equation based on the picture below.



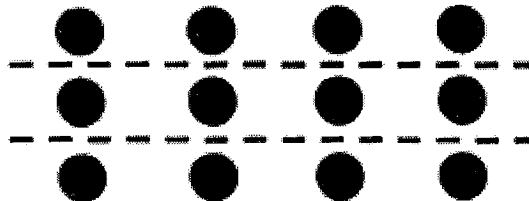
$$\square \times \bigcirc \square = \square$$

13. Write a division equation for the picture below.




$$\square \div \bigcirc = \square$$

14. Tick (✓) the statements that correctly describe the picture below.




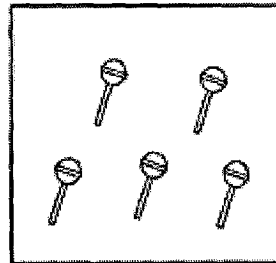
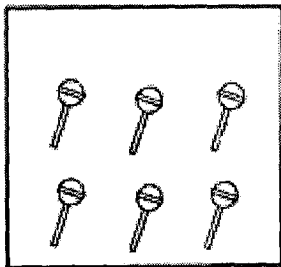
	Tick (✓)
$3 + 3 + 3$	
3 fours	
4×4	
$4 + 4 + 4$	

15. Bala gave 30 strawberries to his 5 friends equally.
How many strawberries did each friend receive?



strawberries

16. Caili had a different number of lollipops in the 3 boxes shown below. Using all the lollipops in the 3 boxes, she wanted to place an equal number of lollipops in each box. How many lollipops should there be in each box?




lollipops

Section C: Problem Sums (8 marks)

Do these sums carefully. Show all your equations and workings clearly in the spaces provided.

17. Tom eats 4 blueberries every day. How many days does he take to eat 28 blueberries?



He takes _____ days to eat 28 blueberries.

18. Siti gave 10 sweets to her 9 friends. Each friend received the same number of sweets. How many sweets did Siti give to her 9 friends altogether?

She gave _____ sweets to her 9 friends altogether.

19. James had 80 cupcakes. He packed all the cupcakes equally into 10 boxes.

(a) How many cupcakes were there in each box?

There were _____ cupcakes in each box.

(b) James also had some muffins. He packed 4 muffins into each of the 10 boxes. How many muffins did James have?

James had _____ muffins altogether.

--- END OF PAPER ---

Setter: Ms Xu Chunshan


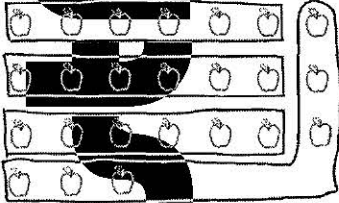

SCHOOL : HENRY PARK PRIMARY SCHOOL


LEVEL : PRIMARY 2

SUBJECT : MATH

TERM : REVIEW 2 (2023)

Q 1	Q2	Q3	Q4	Q5
1	3	2	2	2

6)	
7)	
8)	40
9)	14
10)	

11)	24
12)	$4 \times 8 = 32$
13)	$18 \div 2 = 9$
14)	3 fours $4 + 4 + 4$
15)	 <p>6 strawberries</p>
16)	5 lollipops
17)	$28 \div 4 = 7$ He takes 7 days to eat 28 blueberries.
18)	$10 \times 9 = 90$ She gave 90 sweets to her 9 friends altogether.
19)	a) $80 \div 10 = 8$ There were 8 cupcakes in each box. b) $4 \times 10 = 40$ James had 40 muffins altogether.