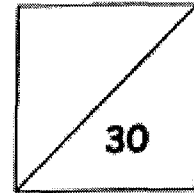




HENRY PARK PRIMARY SCHOOL
2023 PRIMARY 2
MATHEMATICS QUIZ 3



Name: _____ () Date: _____

Class: Primary 2 _____ Parent's Signature: _____

Section A: Multiple-choice Questions (6 marks)

Choose the correct answer and write its number (1, 2, 3 or 4) in the brackets provided. Questions 1 to 4 carry 1 mark each. Question 5 carries 2 marks.

1. $8 \times 4 =$ _____

- 1) 12
- 2) 2
- 3) 32
- 4) 36

()

2. $27 \div 3 =$

- 1) 8
- 2) 9
- 3) 24
- 4) 30

()

3. 7×3 is _____ more than 5×3 .

- 1) 6
- 2) 2
- 3) 15
- 4) 21


()

4. Mrs Tan gave 36 pencils to her students. Each student received 4 pencils. How many students did she have?

- 1) 8
- 2) 9
- 3) 32
- 4) 40

()

5. Look at the pictures below.



Which of the following does **not** describe the pictures?

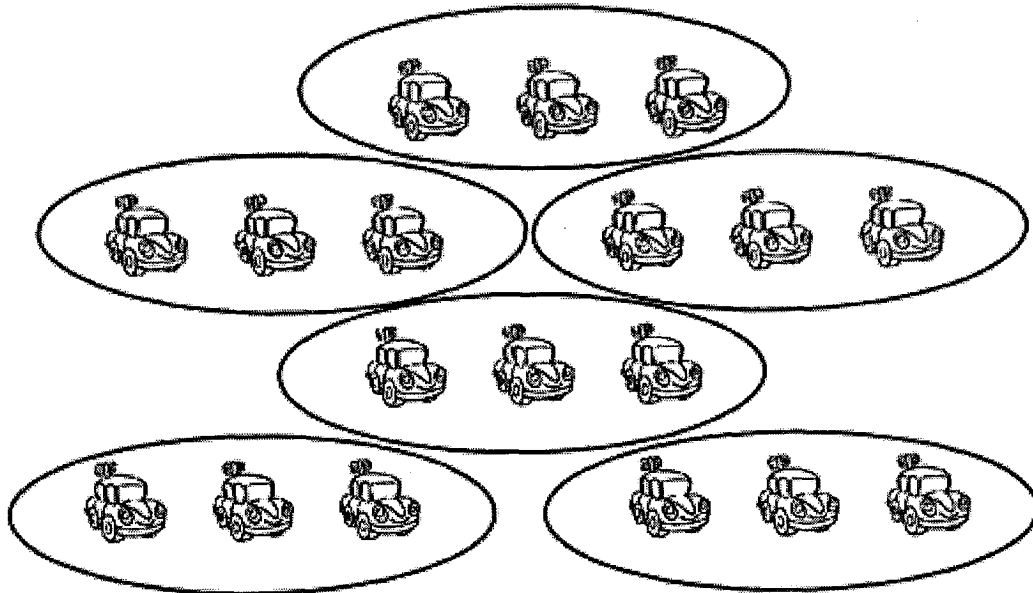
- 1) 4 sixes
- 2) 4×6
- 3) 4 groups of 6
- 4) $4 + 4 + 4 + 4$

()

Section B: Open-ended Questions (8 marks)

Fill in the correct answers in the spaces provided. Questions 6 to 9 carry 2 marks each.

6. Fill in the boxes to complete the multiplication equation based on the picture below.




$$\square \times \square = \square$$

7. Cupboard A has a mass of 254 kg. It is 118 kg lighter than Cupboard B. What is the mass of Cupboard B?

kg

8. Mrs Tang toasted some slices of bread for 8 of her customers. Each customer received 3 slices of toasted bread. How many slices of bread did Mrs Tang toast?



slices

9. Miss Salina bought 5 packets of cookies. There were 8 cookies in each packet. All the cookies were shared equally by her 4 children. How many cookies did each child get?

cookies

Section C: Problem Sums (16 marks)

Do these sums carefully. Write all your equations, workings and final answers clearly in the spaces provided. You may use models to help you. Question 10 carries 2 marks.

10. Sara had 30 marbles. She placed all the marbles equally into boxes. She placed 3 marbles in each box. How many boxes did Sara use?

Working

She used _____ boxes.

Questions 11 and 12 carry 4 marks each.

11. Uncle Chong sold 583 cups of coffee. He sold 223 cups of tea.

(a) How many cups of coffee and tea did he sell altogether?

Working

He sold _____ cups of coffee and tea altogether.

(b) How many more cups of coffee than cups of tea did Uncle Chong sell?

Working

He sold _____ more cups of coffee than cups of tea.

12. Dan bought 24 footballs. He placed them equally into 4 bags.

(a) How many footballs were there in each bag?

Working

There were _____ footballs in each bag.

(b) Each bag of footballs has a mass of 3 kg.

What is the total mass of 4 such bags of footballs?

Working

The total mass of 4 such bags is _____ .

Questions 13 and 14 carry 3 marks each.

13. Mrs Mani sold 520 candies at a funfair.
She sold 155 more candies than Madam Ang.
How many candies did they sell in all?

Working

They sold _____ candies in all.

14. Aunt Rose had some beads.
She bought another 330 beads.
She then gave 115 beads to her friend.
She had 252 beads left.
How many beads did she have at first?

Working

She had _____ beads at first.

--- END OF PAPER ---

SCHOOL : HENRY PARK PRIMARY SCHOOL

LEVEL : PRIMARY 2

SUBJECT : MATH

TERM : REVIEW 3 (2023)

Q 1	Q2	Q3	Q4	Q5
3	2	1	2	4

6)	$3 \times 6 = 18$
7)	$254 + 118 = 372$ kg
8)	24 slices
9)	10 cookies
10)	$30 \div 3 = 10$ She used 10 boxes
11)	a) $583 + 223 = 806$ He sold 806 cups of coffee and tea altogether. b) $583 - 223 = 360$ He sold 360 more cups of coffee than cups of tea.
12)	a) $24 \div 4 = 6$ There were 6 footballs in each bag. b) $4 \times 3 = 12$ kg The total mass of 4 such bags is 12kg.
13)	$520 - 155 = 365$ $520 + 365 = 885$ They sold 885 candies in all.

14)

$$115 + 252 = 367$$

$$367 - 330 = 37$$

She had 37 beads at first.