

Maha Bodhi School
2023 Topical Review 1
Primary 2 Mathematics

Name: _____ ()

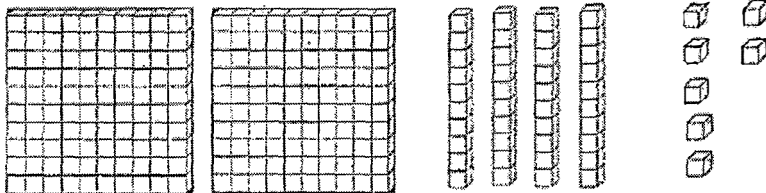
Class: Primary 2 _____ Duration: 30 minutes

Date: _____ Parent's signature: _____

Section A: Multiple Choice Questions

Fill in the correct option 1, 2, 3 or 4 in the brackets provided.

1. How many cubes are there?

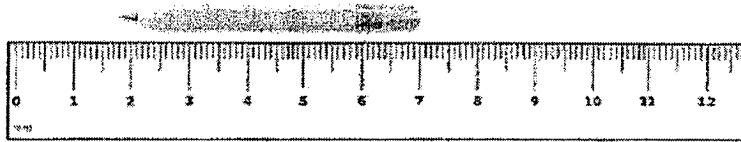


- (1) 246
- (2) 247
- (3) 264
- (4) 274


()

2. The table below shows the length of 4 objects.

Object A




Object B



Object C



Object D

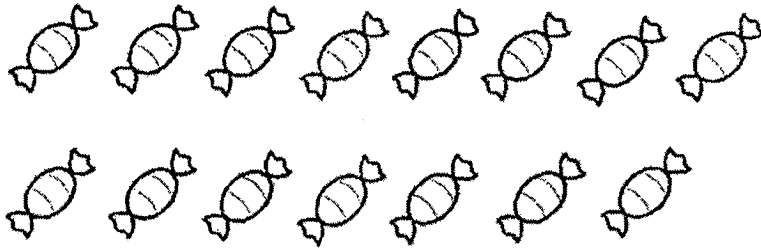


Which object is the longest?

- (1) A
- (2) B
- (3) C
- (4) D

()

3. We can group 15 sweets equally into _____.



- (1) 2 groups of 8
 - (2) 2 groups of 7
 - (3) 3 groups of 6
 - (4) 3 groups of 5
- ()

4. $20 \div 5 = \boxed{\quad ? \quad} \times 2$

- (1) 15
 - (2) 2
 - (3) 25
 - (4) 4
- ()

5. 37, 39, $\boxed{\quad ? \quad}$, 43, 45

The missing number in the box is _____.

- (1) 38
 - (2) 40
 - (3) 41
 - (4) 42
- ()

Section B: Short Answer Questions

Write your answers in the spaces provided.

6. Write 598 in words.


Answer: _____

7. Look at the numbers below.
Arrange the numbers, begin with the smallest.

76	69	71
----	----	----

Answer: _____, _____, _____
 smallest

8. Estimate the height of the tree in metres.

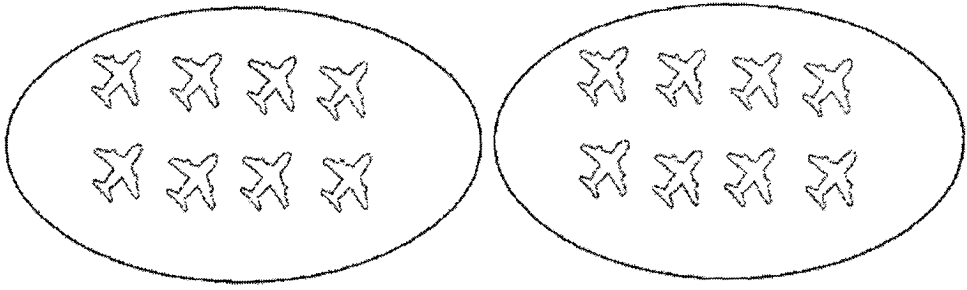


Answer: _____ m

9. $100 \div 10 = \boxed{?}$

Answer: _____

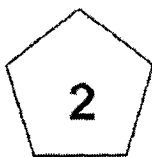
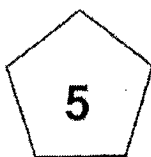
10. Look at the pictures below.
What is the missing number in the multiplication equation?



$2 \times \boxed{?} = 16$

Answer: _____

11. Write the smallest possible 3-digit even number with the following digits.

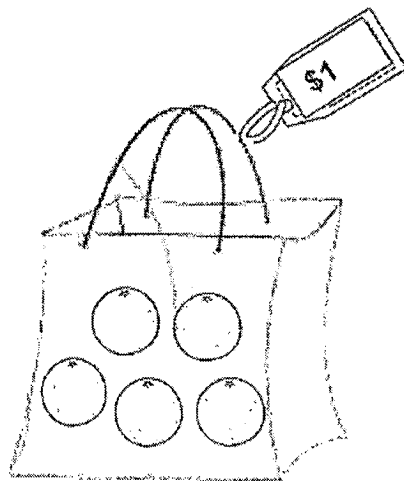


Answer: _____

12. 5 boys borrowed a total of 35 books from the library.
Each of them borrowed the same number of books.
How many books did each boy borrow?

Answer: _____ books

13. Oranges were sold at 5 for \$1.
Mrs Lim bought some oranges for \$5.
How many oranges did she buy?



Answer: _____

15. Building A is 145 m tall.
Building B is 56 m shorter than Building A.
How tall is Building B?

Building B is _____ m tall.

— The End —



Remember to check your work!

SCHOOL : MAHA BODHI PRIMARY SCHOOL

LEVEL : PRIMARY 2

SUBJECT : MATH

TERM : REVIEW 1 (2023)

Q 1	Q2	Q3	Q4	Q5
2	3	4	2	2

6)	Five hundred and ninety-eight
7)	69, 71, 76
8)	3m
9)	10
10)	8
11)	352
12)	7
13)	25
14)	$9 \times 5 = 45$ She need 45 cards
15)	$145 - 56 = 89$ Building B is 89 m tall

