



Maha Bodhi School
2023 Topical Review 2
Primary 2 Mathematics

Name: _____ ()

Class: Primary 2 _____

Duration: 30 minutes

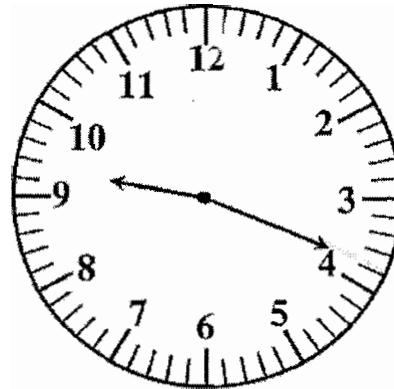
Date: _____

Parent's Signature: _____

Section A: Multiple Choice Questions

Fill in the correct option (1, 2, 3 or 4) in the brackets () provided.

1. What is the time shown on the clock?



- (1) 3:45
(2) 4:46
(3) 9:19
(4) 9:30


()

2. What is 3 h 40 min in minutes?

- (1) 184 min
(2) 220 min
(3) 340 min
(4) 403 min

()

3.



Which of the following is the same as what is shown in the picture?

(1) 4 groups of 5


(2) 5 groups of 4

(3) $4 + 4 + 4 + 4$

(4) $5 + 5 + 5 + 5 + 5$

()

4. What is the total amount of money shown here?

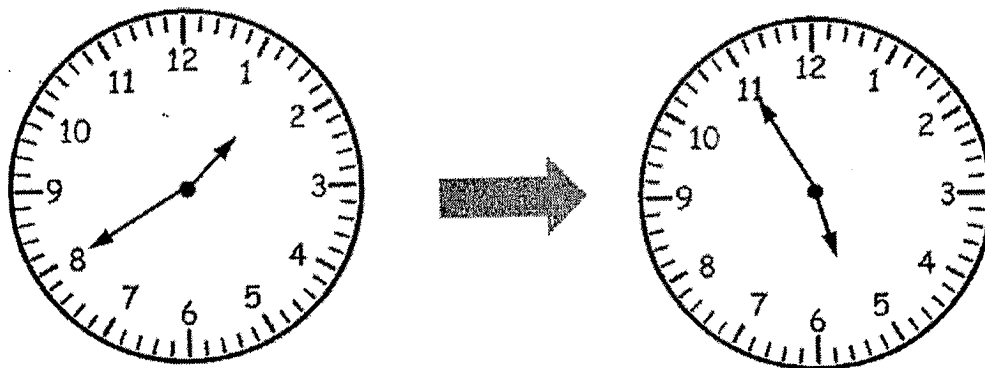


- (1) \$15.60
- (2) \$15.00
- (3) \$14.60
- (4) \$12.00

()

5. On Monday, Farah stayed at the student care centre from 1:40 pm to 5:55 pm.

She spent _____ at the student care centre.



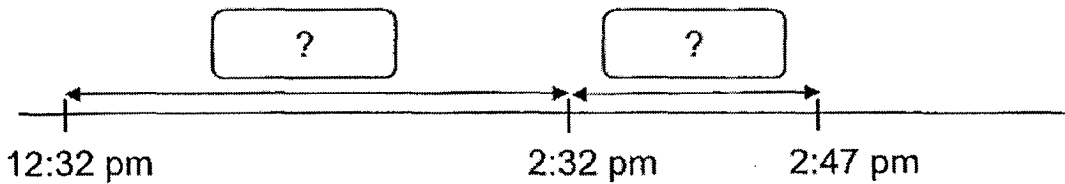
- (1) 4 h 20 min
- (2) 4 h 15 min
- (3) 5 h 15 min
- (4) 9 h 20 min

()

Section B: Short Answer Questions


Write your answers in the spaces provided.

6. Jane started building a sandcastle at 12.32 am.
She finished building it at 2.47 pm.
How long did she spend building the sandcastle?
Give your answer in hour and minutes.
(Use the timeline to work out your answer)



Answer: _____ h _____ min

7. There are 12 cupcakes. Mrs Lim puts the cupcakes equally into 4 boxes. How many cupcakes are there in each box?



Answer: _____ cupcakes

8. Write \$3.05 in cents.

Answer: _____ ¢

9. There were 453 boys and 186 girls who went to the zoo.
How many children went to the zoo altogether?

Answer: _____ children

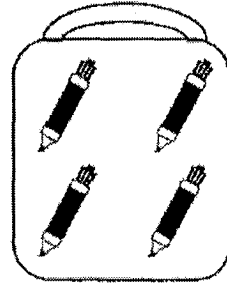
10. Joe had 217 marbles.
Sam had 96 fewer marbles than Joe.
How many marbles did Sam have?

Answer: _____ marbles

11. Carol pasted 27 stickers on 3 pieces of paper.
She pasted the same number of stickers on each piece of paper.
How many stickers were there on each piece of paper?

Answer: _____ stickers

12. Mary spent \$15 to buy some markers.
4 markers are sold in a box for \$3.
How many markers did she buy?



4 markers for \$3

Answer: _____ markers

Section C: Long Answer Questions

Show your number equations clearly and complete the answer statements.

13. Tom had 500 cards.

He had 128 more cards than Jerry.

(a) How many cards did Jerry have?


Jerry had _____ cards.

(b) How many cards did they have altogether?

They had _____ cards altogether.

14. Serena bought a cap and a pair of jogging shoes.
She had \$137 left.

(a) How much did she spend in all?



She spent _____ in all.

(b) How much money did she have at first?

She had _____ at first.

----- The End -----

Remember to check your work!




SCHOOL : MAHA BODHI PRIMARY SCHOOL

LEVEL : PRIMARY 2

SUBJECT : MATH

TERM : REVIEW 2 (2023)

Q 1	Q2	Q3	Q4	Q5
3	2	1	3	2

6)	2h 15min
7)	 3 cupcakes
8)	$\$3.05 = \$3 + 5c$ $= 300C + 5c$ $= 305C$
9)	$453 + 186 = 639$ children
10)	121 marbles
11)	9 stickers
12)	20 markers
13)	a) $500 - 128 = 372$ Jerry had 372 cards b) $372 + 500 = 872$ They had 872 cards altogether.

14)

a) $28 + 95 = 123$

She spent \$123 in all.

b) $123 + 137 = 260$

She had \$260 at first