



Maha Bodhi School
2025 Topical Review 2
Primary 2 Mathematics

Name: _____ ()

Class: Primary 2 _____

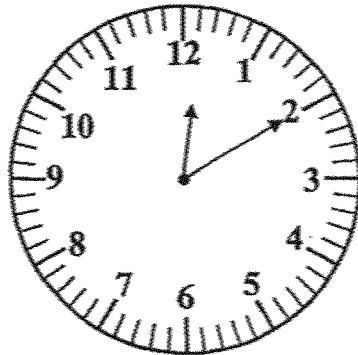
Duration: 30 minutes

Date: _____ Parent's Signature: _____

Section A: Multiple Choice Questions

Fill in the correct option (1, 2, 3 or 4) in the brackets () provided.

1. What is the time shown on the clock?



- (1) 2:00
(2) 2:01
(3) 12:02
(4) 12:10

()

2. 1 h 45 min = _____ min

- (1) 55
- (2) 95
- (3) 105
- (4) 145

()


3. What is the missing number in the box?

$$7 + 7 + 7 + 7 = \boxed{?} \times 7$$

- (1) 28
- (2) 21
- (3) 7
- (4) 4

()

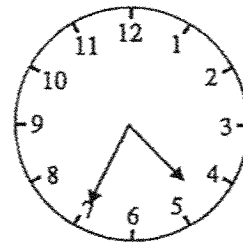

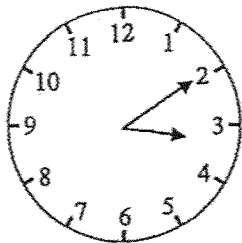
4. What is the amount of money in dollars and cents?



- (1) \$15.00
- (2) \$15.70
- (3) \$16.00
- (4) \$16.80

()

5. Jake begins his piano lesson at 3:10 pm.
The lesson ends at 4:35 pm.
The lesson lasts for _____ min.



- (1) 25
- (2) 30
- (3) 60
- (4) 85

()

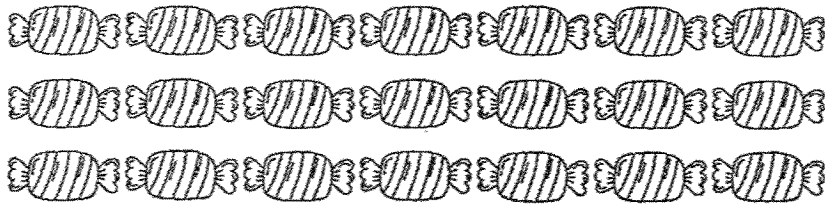
Section B: Short Answer Questions

Write your answers in the spaces provided.

6. Ali starts his breakfast at 7:30 am. He eats for 50 min. What time does he finish his breakfast?

Answer: _____

7. 3 boys share 21 sweets equally.
How many sweets does each boy get?



Answer: _____ sweets

8. $8305 \text{¢} = \$?$

Answer: \$ _____

9. Alex had 204 cards.
He gave 37 cards to his friend.
How many cards does Alex have now?

Answer: _____ cards

10. A baker sold 432 cupcakes on Saturday.
He sold 215 cupcakes on Sunday.
How many cupcakes were sold over the weekend?

Answer: _____ cupcakes

11. Lena bought 4 boxes of tennis balls.
Each box contains 8 tennis balls.
How many tennis balls did Lena buy?

Answer: _____ tennis balls

12. Benny had \$100.



Toy car
\$19



doll
\$33



basketball
\$22



teddy bear
\$45

He bought 2 different items and had \$22 left.

Which items did he buy?

Answer: _____
and _____

Section C: Long Answer Questions

Show your number equations clearly and complete the answer statements.

13. Ethan spent \$542 on a holiday trip.

He spent \$195 more than Olivia.

(a) How much did Olivia spend?

Olivia spent _____.

(b) How much did Ethan and Olivia spend altogether?

They spent _____ altogether.

14. Mr Lim planted a total of 526 flowers.

He planted some flowers on Friday and 229 flowers on Saturday.

(a) How many flowers did he plant on Friday?

He planted _____ flowers on Friday.

(b) How many fewer flowers did he plant on Saturday than on Friday?

He planted _____ fewer flowers on Saturday than on Friday.

----- The End -----



Remember to check your work!

SCHOOL : MAHA BODHI SCHOOL
LEVEL : PRIMARY 2
SUBJECT : MATH
TERM : REVIEW 2

Q1)	4
Q2)	3
Q3)	4
Q4)	3
Q5)	4
Q6)	8.20am
Q7)	7 sweets
Q8)	\$83.05
Q9)	167 cards
Q10)	647 cupcakes
Q11)	32 tennis balls
Q12)	Teddy bear and doll
Q13)	a) $542 - 195 = 347$ Olivia spent \$347 b) $542 + 347 = 889$ They spent \$889 altogether
Q14)	a) $526 - 229 = 297$ He planted 297 flowers on Friday b) $297 - 229 = 68$ He planted 68 fewer flowers on Saturday than on Friday

END