

NAN HUA PRIMARY SCHOOL
2025 PRELIM REVISION SET (2)
PRIMARY 6
MATHEMATICS
PAPER 1

Name: _____ ()

Date: _____

Class: Primary 6M _____

Questions 1 to 10 carry 1 mark each. Questions 11 to 15 carry 2 marks each.
For each question, four options are given. One of them is the correct answer.
Make your choice (1, 2, 3 or 4) and shade your answer on the Optical Answer Sheet.
(20 marks)

1 How many hundredths are there in 0.8?

- (1) 0.08
- (2) 0.8
- (3) 8
- (4) 80

2 What is the sum of all the factors of 9?

- (1) 12
- (2) 13
- (3) 15
- (4) 16

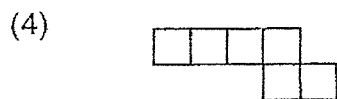
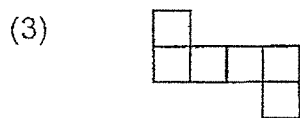
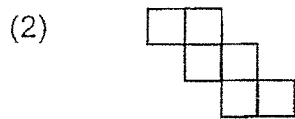
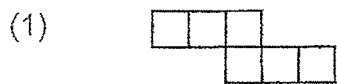
3 Express 8 km 20 m in km.

- (1) 8020 m
- (2) 8.002 km
- (3) 8.02 km
- (4) 8.2 k

6 A movie started at 10.35 p.m and ended at 1.15 a.m. How long did the movie last?

- (1) 2 h 10 min
- (2) 2 h 20 min
- (3) 2 h 40 min
- (4) 2 h 50 min

7 Which one of the following is not a net of the cube?



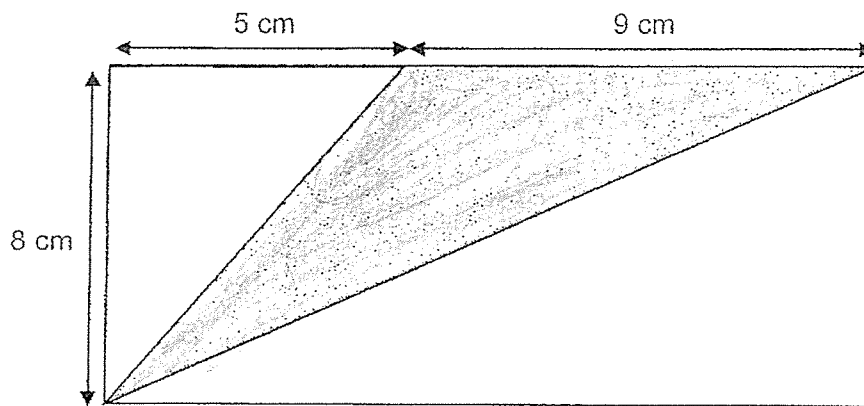
8 Which of the following is the most likely mass of an apple?

- (1) 20 kg
- (2) 2 kg
- (3) 200 g
- (4) 20 g

9 James paid \$20 for 40 rulers. How much did each ruler cost?

- (1) 5 cents
- (2) 2 cents
- (3) 50 cents
- (4) 20 cents

10 In the rectangle below, find the area of the shaded triangle.



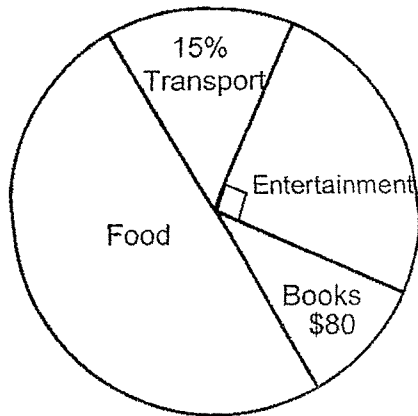
- (1) 20 cm^2
- (2) 36 cm^2
- (3) 56 cm^2
- (4) 72 cm^2

11 Two years ago, Andy was n years older than Belle.

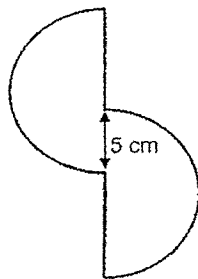
Andy is twice her age now, how old was Belle 2 years ago?

- (1) n
- (2) $2n$
- (3) $n - 2$
- (4) $2n - 2$

- 12 The pie chart shows Lilian's expenditure last month. She spent half of what she had on food. How much did she spend on transport?



- (1) \$120
 (2) \$200
 (3) \$400
 (4) \$800
- 13 The figure is made up of 2 identical semicircles of diameter 14 cm. Find the perimeter of the figure. Take $\pi = \frac{22}{7}$



- (1) 44 cm
 (2) 62 cm
 (3) 67 cm
 (4) 72 cm

- 14 There were a total of 50 blue, red and white marbles in a box. The number of blue and red marbles was $\frac{2}{5}$ of the total number of marbles. The number of red and white marbles was $\frac{9}{10}$ of the total number of marbles. Find the number of red marbles.

- (1) 15
- (2) 20
- (3) 25
- (4) 45

- 15 In a school, 40% of the pupils are boys.
5% of the boys and 20% of the girls walk to school.
What percentage of the pupils in the school walk to school?

- (1) 14%
- (2) 15%
- (3) 25%
- (4) 65%

Questions 16 to 20 carry 1 mark each. Write your answers in the spaces provided.
For questions which require units, give your answers in the units stated. (5 marks)

Do not write
in this space

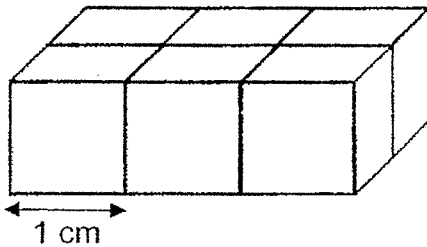
16 Express 8% as a fraction. Give your answer in its simplest form.

Ans: _____

17 Round 589.02 to the nearest tenth.

Ans: _____

18 Six identical cubes are glued together to form a cuboid as shown below. Each cube has the length of 1 cm. The cuboid is then submerged fully into a pail of red paint. Find the total area of the cuboid that is painted red.



Ans: _____ cm²

(Go on to the next page)

19 What is the greatest possible whole number that gives 9300 when rounded to the nearest ten?

Do not write
in this space

Ans: _____

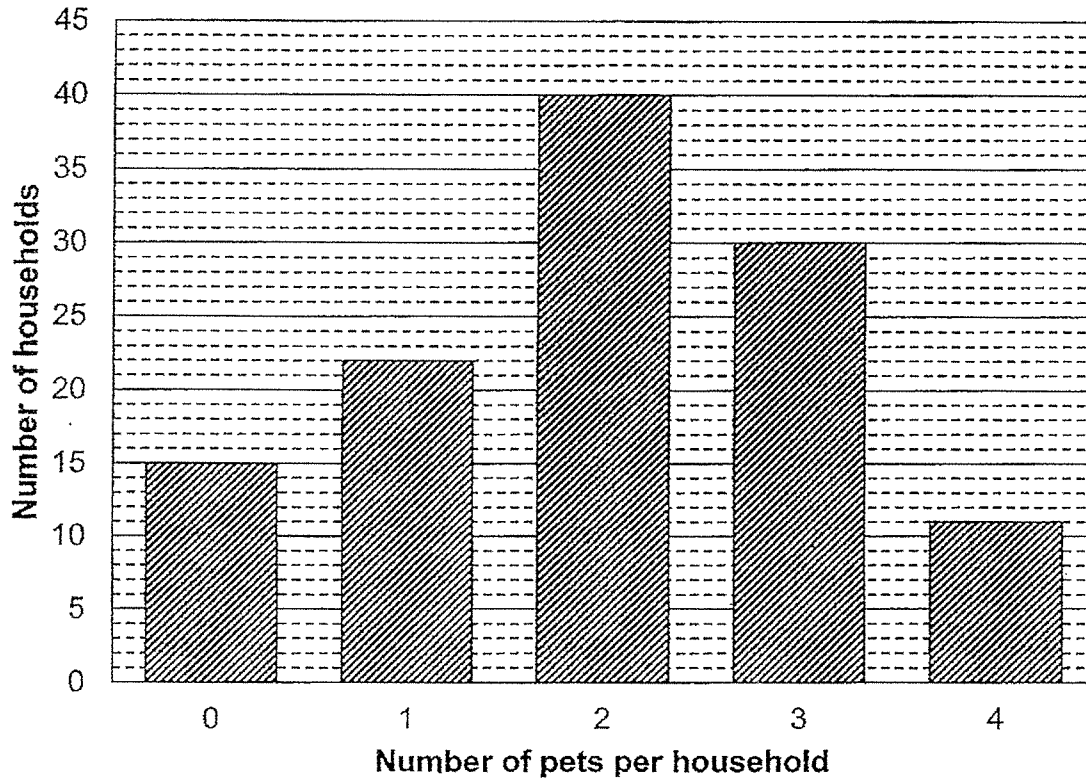
20 Give a fraction that is halfway between $\frac{1}{5}$ and $\frac{1}{3}$.

Ans : _____

Questions 21 to 30 carry 2 marks each. Show your working clearly and write your answers in the spaces provided. For question which require units, give your answers in the units stated. (20 marks)

Do not write in this space

- 21 The graph below shows the number of pets per household in a block of flats.



How many pets are there in this block of flats?

Ans : _____

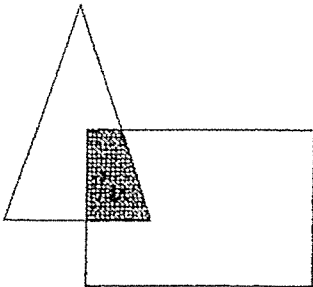
- 22 Study the pattern below carefully. If the pattern continues, what is the 99th letter?

S Q U A R E S Q U A R E S Q U A R E
 1st 18th

Do not write
in this space

Ans : _____

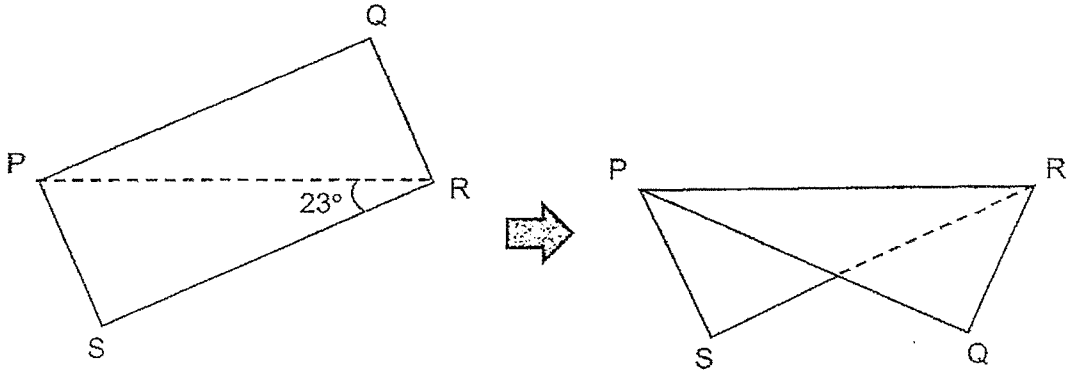
- 23 The figure below is made up of triangle and a rectangle. The area of the rectangle is twice the area of the triangle. $\frac{1}{8}$ of the rectangle is shaded. What is the ratio of the shaded area to the total area of the figure?



Ans: _____

- 24 A rectangle PQRS is folded along its diagonal PR as shown below. Given that $\angle PRS = 23^\circ$, find $\angle QRS$ after the fold.

Do not write
in this space



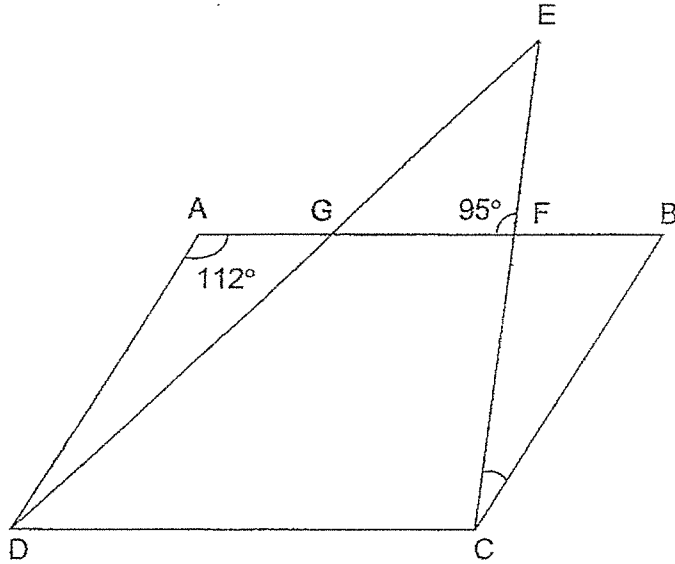
Ans : _____^o



25 In the diagram below, ABCD is a parallelogram.

CFE and DGE are straight lines.

Find $\angle BCF$.



Do not write
in this space

Ans : _____ °



- 26 Jack and Keith left Town X at the same time and travelled in opposite directions along a straight road. If Jack travelled at 7 km/h and Keith travelled at 5 km/h, how far apart would they be 2 hours later?

Do not write
in this space

Ans : _____ km

- 27 A group of 5 boys rented a paddle boat for 2 hours and took turns to play. At any one time, there were 3 boys paddling the boat. On average, how long did each boy play on the paddle boat?

Ans: _____ min

(Go on to the next page)

- 28 Two numbers X and Y are in the ratio of 3 : 7. After Y is halved and X is increased by 4, the ratio became 1 : 1. What is the original value of X?

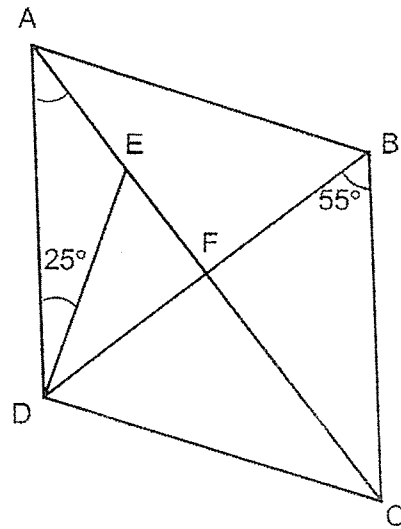
Do not write
in this space

Ans: _____

- 29 John has just enough money to buy either 6 rulers and 3 erasers or 4 rulers and 8 erasers. He spends all the money on erasers, how many erasers can he buy?

Ans : _____

- 30 In the figure below, ABCD is a rhombus. AEF and BFD are straight lines. Find $\angle DAE$.



Do not write
in this space

Ans : _____^o



End of Paper

YEAR : 2025
 LEVEL : PRIMARY 6
 SCHOOL : NAN HUA PRIMARY SCHOOL
 SUBJECT : MATHEMATICS
 TERM : REVISION 2

(BOOKLET A)

Q1	4	Q2	2	Q3	3	Q4	2	Q5	1
Q6	3	Q7	4	Q8	3	Q9	3	Q10	2
Q11	3	Q12	1	Q13	2	Q14	1	Q15	1

(BOOKLET B)

Q16	$\frac{8}{100} = \frac{2}{25}$	Q17	$589.02 = 589.0$
Q18	$3 \times 2 = 6$ $6 \times 2 = 12$ $2 \times 2 = 4$ $12 + 6 + 4 = 22\text{cm}^2$	Q19	$9300 + 4 = 9304$
Q20	$\frac{1}{5} + \frac{1}{3} = \frac{3}{15} + \frac{5}{15} = \frac{8}{15}$ $\frac{8}{15} \div 2 = \frac{8}{15} \times \frac{1}{2} = \frac{4}{15}$	Q21	$15 \times 0 = 0$ $22 \times 1 = 22$ $40 \times 2 = 80$ $30 \times 3 = 90$ $11 \times 4 = 44$ $44 + 90 + 80 + 22 = 236$
Q22	$99 \div 6 = 16\text{R}3$ Ans : U	Q23	S : TA 1 : 11
Q24	$90^\circ - 23^\circ = 67^\circ$ $67^\circ - 23^\circ = 44^\circ$	Q25	Angle BFC = Angle AFE = 95° (vertically opposite angles) Angle ABC = $180^\circ - 112^\circ = 68^\circ$ Angle BCF = $180^\circ - 68^\circ - 95^\circ = 17^\circ$
Q26	$7\text{km/h} + 5\text{km/h} = 12\text{km/h}$ $12\text{km/h} \times 2\text{h} = 24\text{km}$	Q27	$2\text{h} \times 3 = 6\text{h}$ $= 360\text{min}$ $360 \div 5 = 72\text{min}$
Q28	Before : X : Y 3 : 7 6 : 14 After : X : Y 1 : 1 7 : 7 $7 - 6 = 1$ $1u = 4$ $6u = 6 \times 4 = 24$	Q29	$6R - 4R = 8E - 3E$ $2R = 5E$ $6R = 15E$ $15 + 3 = 18$

Q30	Angle ADB = Angle DBC (Alternate angles) 55° Angle EDB = $55^\circ - 25^\circ = 30^\circ$ Angle DEF = $180^\circ - 90^\circ - 30^\circ = 60^\circ$ Angle DEA = $180^\circ - 60^\circ = 120^\circ$ Angle DAE = $180^\circ - 120^\circ - 25^\circ = 35^\circ$
-----	--

2
END